
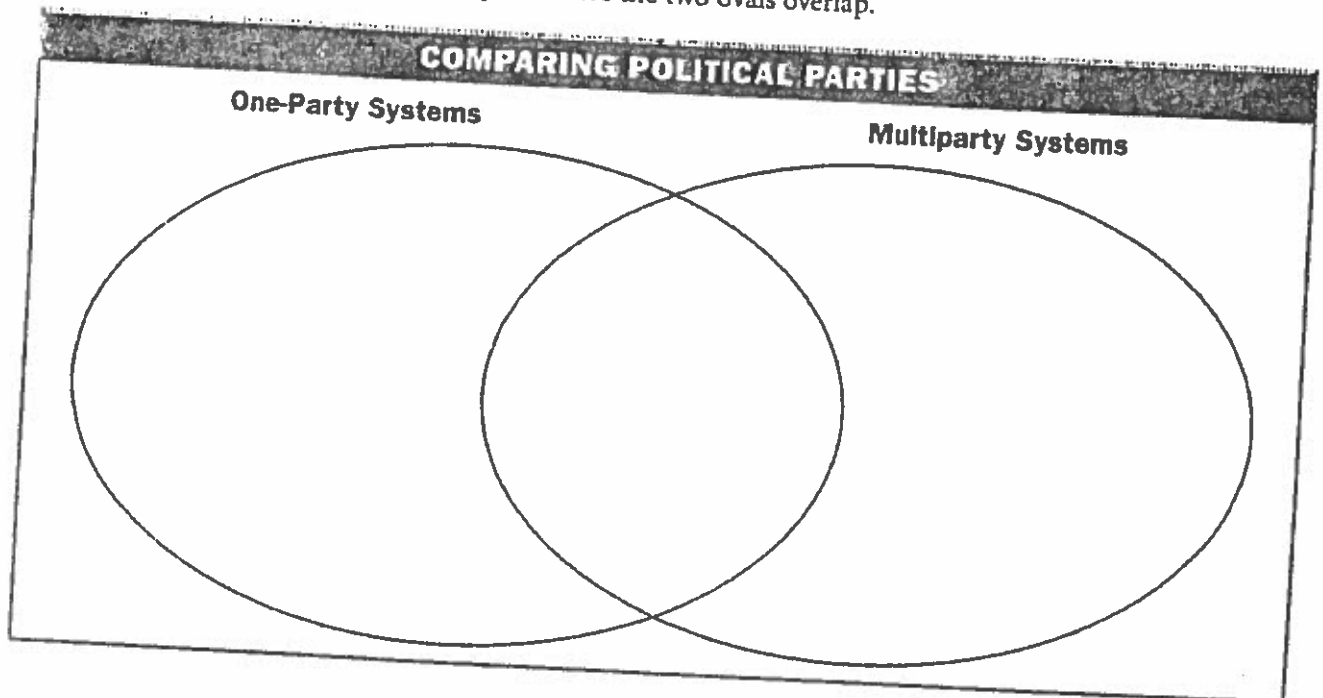


Guided Reading Activity 16-1

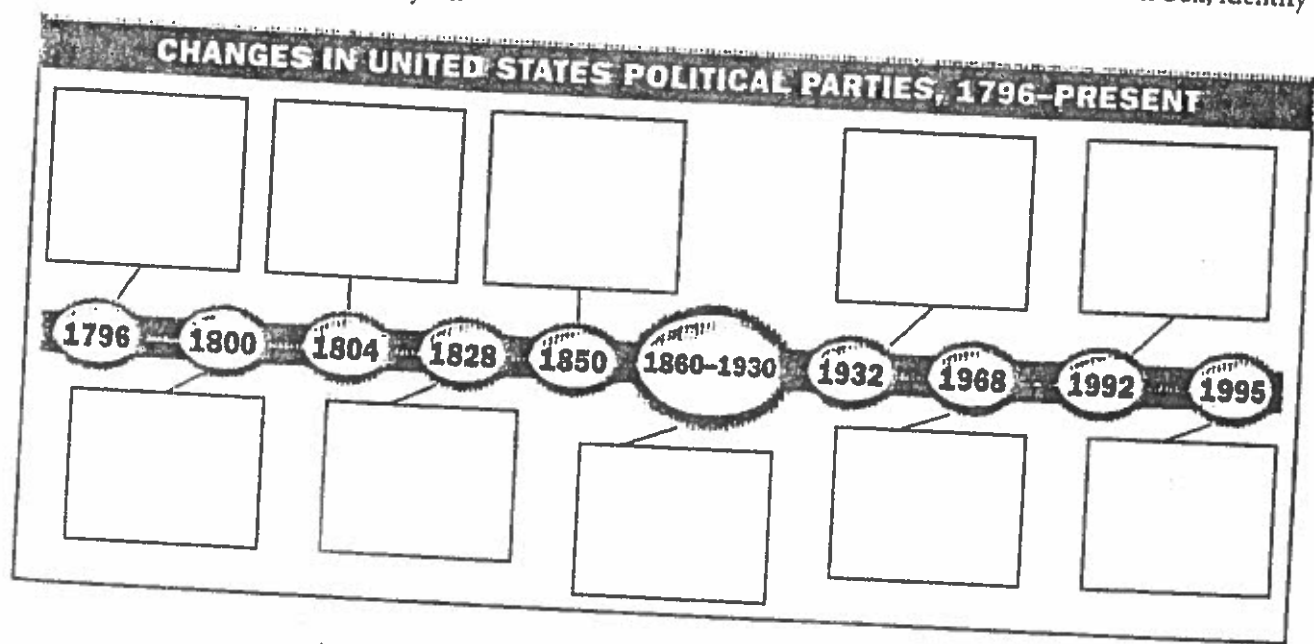


Development of Parties

★ DIRECTIONS Use the information in your textbook to complete this Venn diagram. Write the differences between the two types of political parties in the outside sections of each oval and the similarities in the space where the two ovals overlap.




★ DIRECTIONS Use the information in your textbook to complete this time line. In each box, identify the event that occurred in that year.



Copyright © by The McGraw-Hill Companies, Inc.

Guided Reading Activity 16-2



Party Organization

★ DIRECTIONS Use the information in your textbook to identify the following items.

1. precinct: _____
2. precinct captain: _____
3. ward: _____
4. party county committee: _____
5. party county chairperson: _____
6. party state chairperson: _____
7. state central committee: _____
8. national convention: _____
9. national committee: _____
10. party national chairperson: _____

★ DIRECTIONS Use the information in your textbook to complete this chart. In each box, list two responsibilities involved in performing each function.

MAJOR FUNCTIONS OF POLITICAL PARTIES IN THE UNITED STATES	
Recruiting Candidates	• •
Educating the Public	• •
Operating the Government	• •
Dispensing Patronage	• •